

Membranes

Question Paper 2

Level	International A Level
Subject	Biology
Exam Board	CIE
Topic	Cell Membranes and Transport
Sub Topic	Membranes
Booklet	Theory
Paper Type	Question Paper 2

Time Allowed : 54 minutes

Score : / 45

Percentage : /100

Grade Boundaries:

A*	A	B	C	D	E	U
>85%	'77.5%	70%	62.5%	57.5%	45%	<45%

- 1 (a) Cell surface membranes are involved with the movement of substances into and out of cells.

Calcium pumps in cell surface membranes maintain a concentration of calcium ions inside the cytoplasm that is a thousand times lower than outside the cell.

Fig. 1.1 shows the movement of calcium ions across a cell surface membrane.

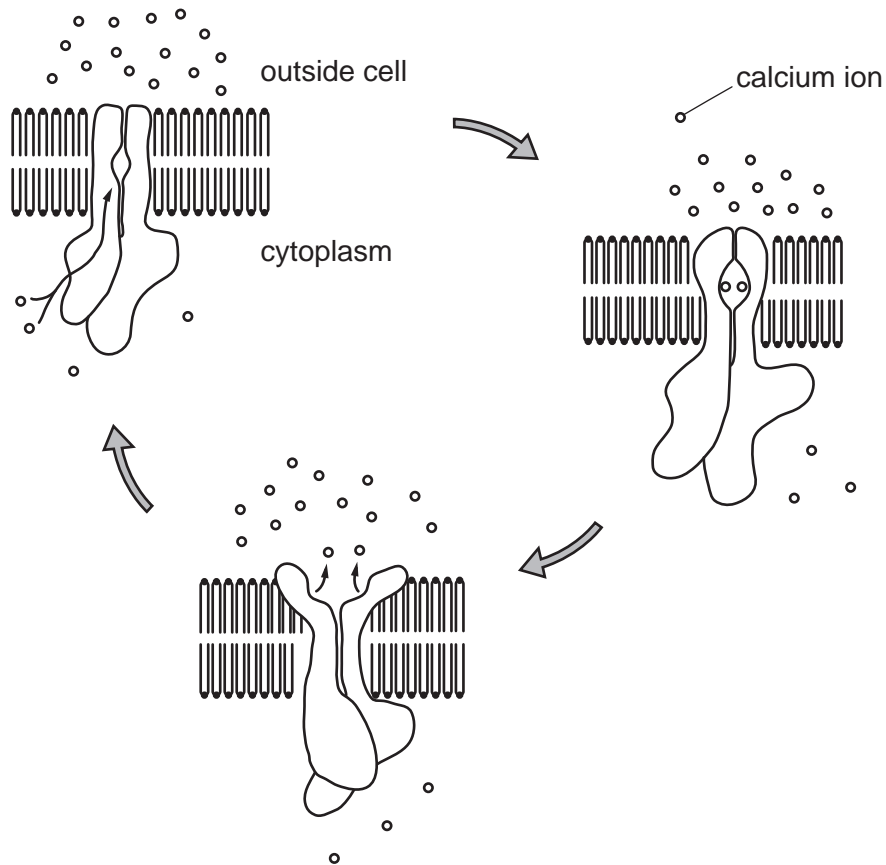


Fig. 1.1

With reference to Fig. 1.1,

- (i) explain why calcium ions do not pass through the phospholipid bilayer;

.....

.....

.....

..... [2]

- (ii) name and describe the process by which calcium ions are moved across the membrane.

name

description

.....
.....
.....
..... [3]

- (b) Phagocytosis is the process by which bacteria are ingested by cells.

Describe the role of the cell surface membrane during phagocytosis.

.....
.....
.....
.....
.....
..... [3]

- (c) Phagocytic cells contain many lysosomes.

Describe the function of lysosomes in destroying ingested bacterial cells.

.....
.....
.....
.....
.....
..... [4]

[Total: 12]

- 2 Receptor proteins are part of the fluid mosaic structure of cell surface (plasma) membranes of T-lymphocytes. Each type of receptor protein is specific to a particular antigen.

Fig. 1.1 shows a receptor protein and the surrounding phospholipids of a cell surface membrane of a T-lymphocyte.

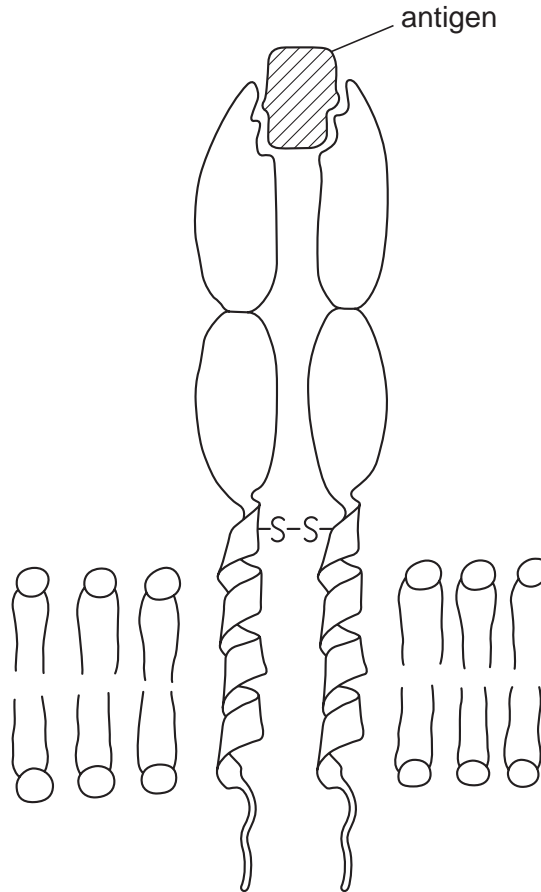


Fig. 1.1

- (a) (i) Draw a bracket ({}) on Fig. 1.1 to indicate the width of the phospholipid bilayer. [1]
(ii) Explain the term *fluid mosaic*.

.....
.....
.....
.....
..... [2]

(iii) Describe how the **structure** of the receptor shown in Fig. 1.1 is similar to the structure of an antibody molecule.

.....
.....
.....
.....
..... [2]

(b) Describe the roles of T-lymphocytes in a primary immune response.

.....
.....
.....
.....
.....
.....
..... [4]

(c) Describe three functions of cell surface membranes, **other than** the recognition of antigens.

1
.....
2
.....
3
..... [3]

[Total: 12]

- 3 (a) State the roles of glycoproteins, carrier proteins and cholesterol in the cell surface membrane of an animal cell.

glycoproteins

.....

.....

carrier proteins

.....

.....

cholesterol

.....

.....[4]

- (b) Fig. 5.1 is a diagram of an animal cell showing the concentrations and direction of movement of an ion (A) and a non-polar molecule (B) on either side of the cell surface membrane.

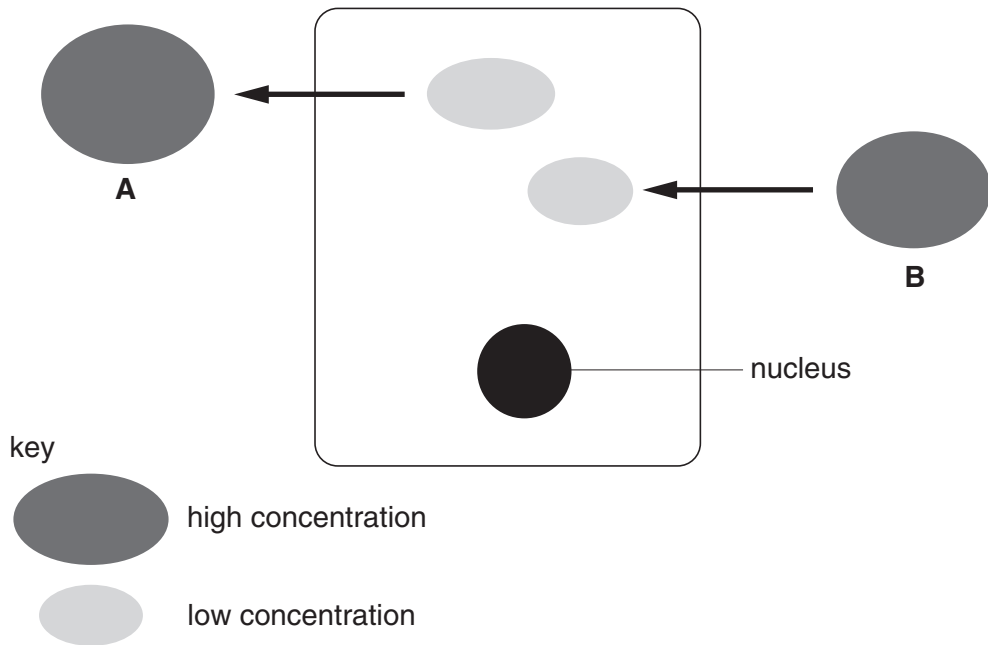


Fig. 5.1

With reference to Fig. 5.1, explain how **A** and **B** cross the cell surface membrane of the cell.

A

.....

.....

B

.....

.....[4]

(c) Describe how particles, such as bacteria, are taken up by phagocytes.

.....

.....

.....[2]

(d) Phagocytes contain many lysosomes.

State the function of lysosomes in phagocytes.

.....

.....[1]

[Total: 11]

4 The cell surface membrane has a fluid mosaic structure.

(a) Describe what is meant by the term *fluid mosaic*.

.....
.....
.....
.....[2]

(b) In 1934, the biologists Davson and Danielli published their suggestion for the structure of the cell surface membrane, as shown in Fig. 1.1.

They suggested that the membrane was a phospholipid bilayer with a layer of hydrophilic protein on both surfaces.

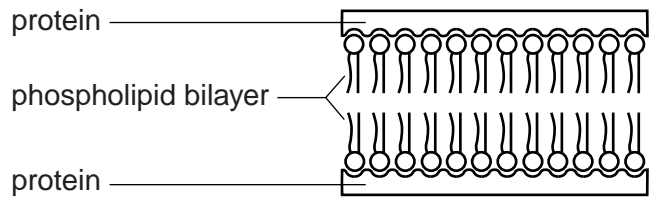


Fig 1.1

State **one** way in which the Davson-Danielli structure is similar to the fluid mosaic structure **and one** way in which it differs from the fluid mosaic model.

similarity

.....
.....[1]

difference

.....
.....[1]

