

UNIVERSITY OF CAMBRIDGE INTERNATIONAL EXAMINATIONS
International General Certificate of Secondary Education

CHEMISTRY



Paper 3 (Extended)

0620/03

October/November 2005

1 hour 15 minutes

Candidates answer on the Question Paper.
No Additional Materials required.

Candidate
Name

--

Centre
Number

--	--	--	--	--

Candidate
Number

--	--	--	--

READ THESE INSTRUCTIONS FIRST

Write your Centre number, candidate number and name on all the work you hand in.

Write in dark blue or black pen.

You may use a pencil for any diagrams, graphs or rough working.

WRITE IN THE BOXES PROVIDED ON THE QUESTION PAPER

DO **NOT** WRITE IN THE BARCODE.

DO **NOT** WRITE IN THE GREY AREAS BETWEEN THE PAGES.

Do not use staples, paper clips, highlighters, glue or correction fluid.

You may use a calculator.

Answer **all** questions.

The number of marks is given in brackets [] at the end of each question or part question.

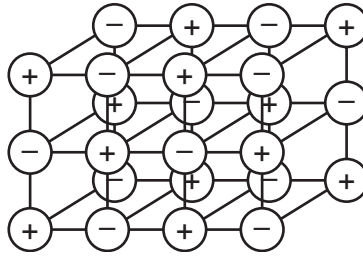
A copy of the Periodic Table is printed on page 16.

For Examiner's Use	
1	
2	
3	
4	
5	
6	
7	
Total	

This document consists of **14** printed pages and **2** blank page.



- 1 (a) The structure of a typical ionic compound is a regular arrangement of positive and negative ions.



- (i) What is the name of this regular arrangement of particles?

..... [1]

- (ii) Give **two** physical properties of ionic compounds.

.....

..... [2]

- (b) Ions are formed by electron loss or gain. The electron distribution of a magnesium atom is $2 + 8 + 2$ and of a nitrogen atom is $2 + 5$.

- (i) Give the formula of the magnesium ion.

..... [1]

- (ii) Give the formula of the nitride ion.

..... [1]

- (iii) What is the formula of the ionic compound, magnesium nitride?

..... [1]

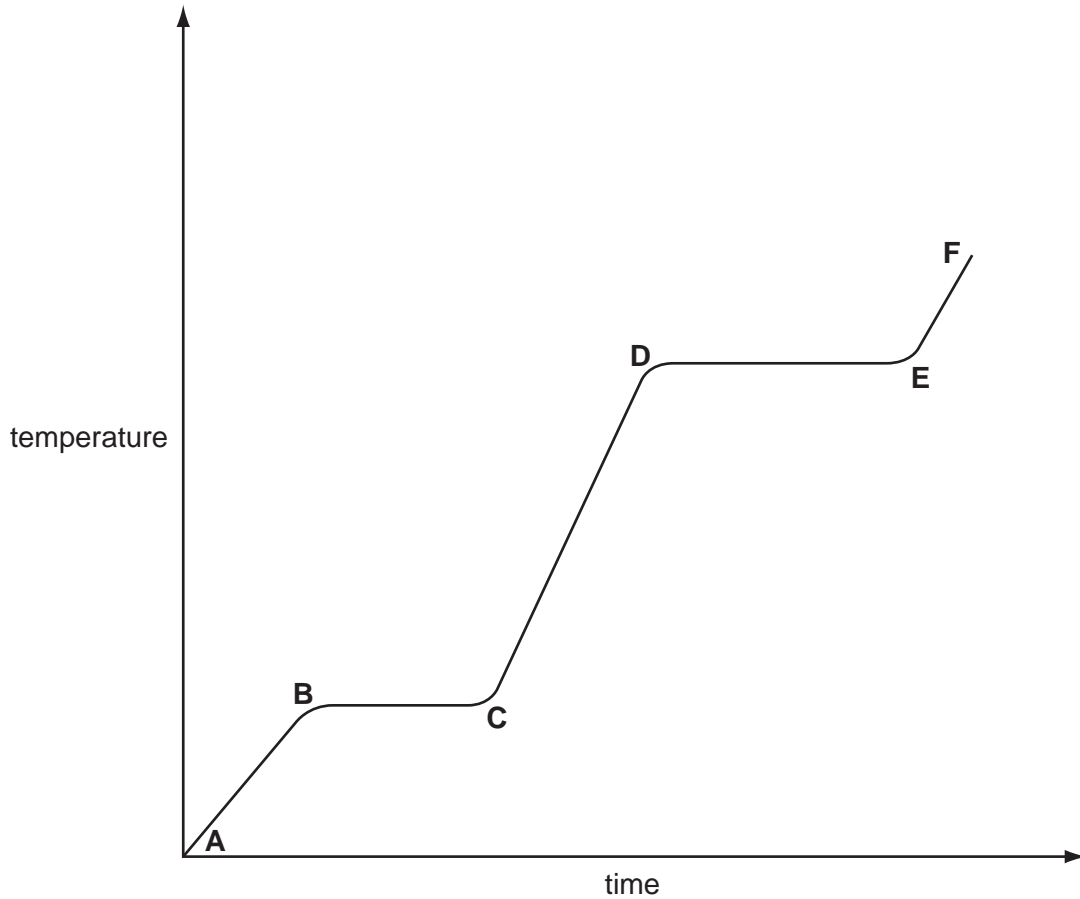
- (iv) In this compound there is an ionic bond. Why are the two ions attracted to each other?

..... [1]

- 2 Ethanoic acid is a colourless liquid at room temperature. It has the typical acid properties and forms compounds called ethanoates.

For
Examiner's
Use

- (a) A pure sample of ethanoic acid is slowly heated from 0°C to 150°C and its temperature is measured every minute. The results are represented on the graph below.



- (i) Name the change that occurs in the region **D** to **E**.

..... [1]

- (ii) What would be the difference in the region **B** to **C** if an impure sample had been used?

..... [1]

- (iii) Sketch on the graph how the line would continue if the acid was heated to a higher temperature. [1]

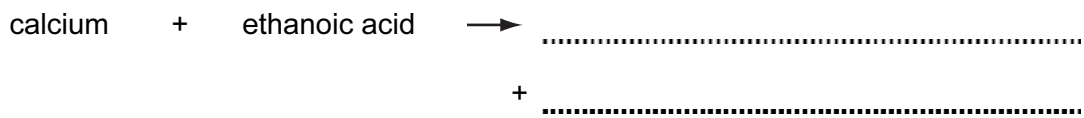
- (iv) Complete the following table that compares the separation and movement of the molecules in regions **C** to **D** with those in **E** to **F**.

For
Examiner's
Use

	C to D	E to F
separation (distance between particles)
movement of particles	random and slow
Can particles move apart to fill any volume?

[5]

- (b) Complete the word equations for the reactions of ethanoic acid.



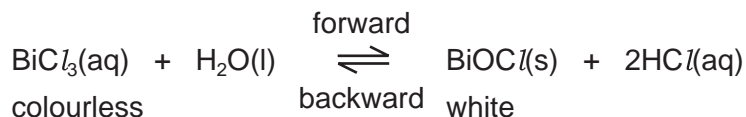
- (c) Write the symbol equation for the reaction between ethanoic acid and sodium hydroxide.

..... [2]

3 Reversible reactions can come to equilibrium. They have both a forward and a backward reaction.

For
Examiner's
Use

(a) When water is added to an acidic solution of bismuth(III) chloride, a white precipitate forms and the mixture slowly goes cloudy.



(i) Explain why the rate of the forward reaction decreases with time.

.....
 [2]

(ii) Why does the rate of the backward reaction increase with time?

.....
 [1]

(iii) After some time why does the appearance of the mixture remain unchanged?

.....
 [2]

(iv) When a few drops of concentrated hydrochloric acid are added to the cloudy mixture, it changes to a colourless solution. Suggest an explanation.

.....
 [2]

(b) Both of the following reactions are reversible.



For
Examiner's
Use

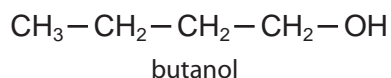
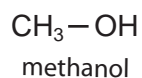
- (i) Suggest a reason why an increase in pressure does not affect the position of equilibrium for reaction 1.

..... [1]

- (ii) What effect would an increase in pressure have on the position of equilibrium for reaction 2? Give a reason for your answer.

.....
..... [2]

- 4 The alcohols form a homologous series. The first member is methanol and the fourth is butanol.



For
Examiner's
Use

- (a) (i) Give **two** general characteristics of a homologous series.

.....

 [2]

- (ii) Calculate the mass of one mole of the C₈ alcohol.

.....
 [2]

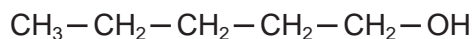
- (b) Give the name and structural formula of the third member of this series.

name [1]

structural formula

[1]

- (c) The structural formula of the fifth member, pentan-1-ol, is drawn below.



- (i) Draw the structural formula of an isomer of this alcohol.

[1]

(ii) Predict the names of the product(s) formed when pentan-1-ol

- reacts with an excess of oxygen,

..... and [1]

- is dehydrated to form an alkene,

..... [1]

- is oxidised by acidified potassium dichromate(VI).

..... [1]

For
Examiner's
Use

- 5 Strontium and zinc are both metals with a valency of 2. Strontium is more reactive than zinc. Its chemistry is similar to that of calcium.

For
Examiner's
Use

- (a) (i) Complete the following table that shows the number of protons, electrons and neutrons in each particle.

particle	protons	electrons	neutrons
^{88}Sr			
^{90}Sr			
$^{65}\text{Zn}^{2+}$			

[3]

- (ii) Explain why ^{88}Sr and ^{90}Sr are isotopes.

..... [1]

- (iii) Complete the electron distribution of an atom of strontium.

2 + 8 + 18 + + [1]

- (b) The major ore of zinc is zinc blende, ZnS .

- (i) Describe how zinc is extracted from zinc blende.

.....

 [2]

- (ii) Give a use of zinc.

..... [1]

(c) The major ore of strontium is its carbonate, SrCO_3 . Strontium is extracted by the electrolysis of its molten chloride.

(i) Name the reagent that will react with the carbonate to form the chloride.

..... [1]

(ii) The electrolysis of molten strontium chloride produces strontium metal and chlorine. Write ionic equations for the reactions at the electrodes.

negative electrode (cathode)

positive electrode (anode) [2]

(iii) One of the products of the electrolysis of concentrated aqueous strontium chloride is chlorine. Name the other two.

..... [2]

(d) Both metals react with water.

(i) Write a word equation for the reaction of zinc and water and state the reaction conditions.

word equation [1]

conditions [2]

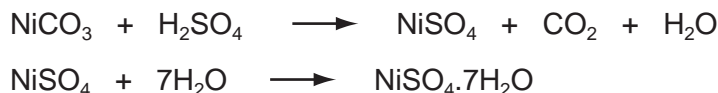
(ii) Write an equation for the reaction of strontium with water and give the reaction condition.

equation [2]

condition [1]

- 6 (a) The following method is used to make crystals of hydrated nickel sulphate.

An excess of nickel carbonate, 12.0 g, was added to 40 cm³ of sulphuric acid, 2.0 mol/dm³. The unreacted nickel carbonate was filtered off and the filtrate evaporated to obtain the crystals.



Mass of one mole of NiSO₄·7H₂O = 281 g

Mass of one mole of NiCO₃ = 119 g

- (i) Calculate the mass of unreacted nickel carbonate.

Number of moles of H₂SO₄ in 40 cm³ of 2.0 mol/dm³ acid = 0.08

Number of moles of NiCO₃ reacted =

Mass of nickel carbonate reacted = g

Mass of unreacted nickel carbonate = g [3]

- (ii) The experiment produced 10.4 g of hydrated nickel sulphate. Calculate the percentage yield.

The maximum number of moles of NiSO₄·7H₂O that could be formed =

.....

The maximum mass of NiSO₄·7H₂O that could be formed = g

The percentage yield = % [3]

- (b) In the above method, a soluble salt was prepared by neutralising an acid with an insoluble base. Other salts have to be made by different methods.

- (i) Give a brief description of how the soluble salt, rubidium sulphate could be made from the soluble base, rubidium hydroxide.

.....

.....

.....

..... [3]

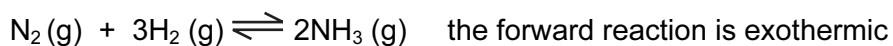
For
Examiner's
Use

(ii) Suggest a method of making the insoluble salt, calcium fluoride.

.....
.....
.....
..... [3]

*For
Examiner's
Use*

- 7 In 1909, Haber discovered that nitrogen and hydrogen would react to form ammonia. The yield of ammonia was 8%.



catalyst platinum
 temperature 600 °C
 pressure 200 atm

For
 Examiner's
 Use

- (a) Describe how hydrogen is obtained for the modern process.

.....
 [2]

- (b) (i) What is the catalyst in the modern process?

..... [1]

- (ii) Explain why the modern process, which uses a lower temperature, has a higher yield of 15%.

.....
 [2]

- (c) (i) Complete the following table that describes the bond breaking and forming in the reaction between nitrogen and hydrogen to form ammonia.

bonds	energy change /kJ	exothermic or endothermic
1 mole of N ≡ N broken	+945
3 moles of broken	+1308
6 moles of N – H formed	-2328

[3]

- (ii) Explain, using the above data, why the forward reaction is exothermic.

.....
 [2]

BLANK PAGE

Permission to reproduce items where third-party owned material protected by copyright is included has been sought and cleared where possible. Every reasonable effort has been made by the publisher (UCLES) to trace copyright holders, but if any items requiring clearance have unwittingly been included, the publisher will be pleased to make amends at the earliest possible opportunity.

University of Cambridge International Examinations is part of the University of Cambridge Local Examinations Syndicate (UCLES), which is itself a department of the University of Cambridge.

DATA SHEET
The Periodic Table of the Elements

Group												III	IV	V	VI	VII	O	
I	II											III	IV	V	VI	VII	O	
7 Li Lithium 3	9 Be Beryllium 4											1 H Hydrogen 1						4 He Helium 2
23 Na Sodium 11	24 Mg Magnesium 12											11 B Boron 5	12 C Carbon 6	14 N Nitrogen 7	16 O Oxygen 8	19 F Fluorine 9	20 Ne Neon 10	
39 K Potassium 19	40 Ca Calcium 20	45 Sc Scandium 21	48 Ti Titanium 22	51 V Vanadium 23	52 Cr Chromium 24	55 Mn Manganese 25	56 Fe Iron 26	59 Co Cobalt 27	59 Ni Nickel 28	64 Cu Copper 29	65 Zn Zinc 30	70 Ga Gallium 31	73 Ge Germanium 32	75 As Arsenic 33	79 Se Selenium 34	80 Br Bromine 35	84 Kr Krypton 36	
85 Rb Rubidium 37	88 Sr Strontium 38	89 Y Yttrium 39	91 Zr Zirconium 40	93 Nb Niobium 41	96 Mo Molybdenum 42	101 Ru Ruthenium 44	106 Pd Palladium 46	103 Rh Rhodium 45	108 Ag Silver 47	112 Cd Cadmium 48	115 In Indium 49	119 Sn Tin 50	122 Sb Antimony 51	127 I Iodine 53	128 Te Tellurium 52	131 Xe Xenon 54		
133 Cs Caesium 55	137 Ba Barium 56	139 La Lanthanum 57	178 Hf Hafnium 72	181 Ta Tantalum 73	184 W Tungsten 74	190 Os Osmium 76	195 Pt Platinum 78	192 Ir Iridium 77	197 Au Gold 79	201 Hg Mercury 80	204 Tl Thallium 81	207 Pb Lead 82	209 Bi Bismuth 83	208 Po Polonium 84	210 At Astatine 85	222 Rn Radon 86		
87 Fr Francium 87	226 Ra Radium 88	227 Ac Actinium 89																
*58-71 Lanthanoid series			141 Pr Praseodymium 59	144 Nd Neodymium 60	150 Sm Samarium 62	152 Eu Europium 63	157 Gd Gadolinium 64	162 Dy Dysprosium 66	165 Ho Holmium 67	169 Tm Thulium 69	173 Yb Ytterbium 70	175 Lu Lutetium 71						
90-103 Actinoid series			140 Ce Cerium 58	232 Th Thorium 90	238 U Uranium 92	238 Pa Protactinium 91	238 Ac Actinium 89	94 Pu Plutonium 94	96 Cm Curium 96	97 Bk Berkelium 97	98 Cf Californium 98	99 Es Einsteinium 99	100 Fm Fermium 100	101 Md Mendelevium 101	102 No Nobelium 102	103 Lr Lawrencium 103		

a = relative atomic mass
X = atomic symbol
b = proton (atomic) number

$\frac{a}{X_b}$

The volume of one mole of any gas is 24 dm³ at room temperature and pressure (r.t.p.).