



UNIVERSITY OF CAMBRIDGE INTERNATIONAL EXAMINATIONS
International General Certificate of Secondary Education

CANDIDATE
NAME

CENTRE
NUMBER

--	--	--	--	--

CANDIDATE
NUMBER

--	--	--	--



CHEMISTRY

0620/32

Paper 3 (Extended)

May/June 2011

1 hour 15 minutes

Candidates answer on the Question Paper.

No Additional Materials are required.

READ THESE INSTRUCTIONS FIRST

Write your Centre number, candidate number and name on all the work you hand in.

Write in dark blue or black pen.

You may use a pencil for any diagrams, graphs or rough working.

Do not use staples, paper clips, highlighters, glue or correction fluid.

DO NOT WRITE IN ANY BARCODES.

Answer **all** questions.

A copy of the Periodic Table is printed on page 12.

At the end of the examination, fasten all your work securely together.

The number of marks is given in brackets [] at the end of each question or part question.

For Examiner's Use	
1	
2	
3	
4	
5	
6	
7	
8	
Total	

This document consists of **12** printed pages.



1 Choose an element from the list below which best fits the description.

Rb Fe Si I P Sr

- (a) An element which reacts with cold water. [1]
- (b) It is a solid at room temperature and exists as diatomic molecules, X_2 [1]
- (c) It can form two oxides, XO and X_2O_3 [1]
- (d) This element has a hydride of the type XH_3 [1]
- (e) It has a macromolecular structure similar to that of carbon. [1]

[Total: 5]

2 Tin is an element in Group IV.

(a) The position of tin in the reactivity series is:

zinc
iron
tin
copper

(i) For each of the following, decide if a reaction would occur. If there is a reaction, complete the equation, otherwise write 'no reaction'.



(ii) Name the **three** products formed when tin(II) nitrate is heated.

.....
..... [2]

(b) Aqueous tin(II) sulfate is electrolysed using carbon electrodes. This electrolysis is similar to that of aqueous copper(II) sulfate using carbon electrodes.

(i) What is the product at the negative electrode (cathode)?

..... [1]

(ii) Write the equation for the reaction at the positive electrode (anode).

..... [2]

(iii) Name the acid formed in this electrolysis.

..... [1]

(c) Steel articles can be plated with tin or zinc to prevent rusting. When the zinc layer is damaged exposing the underlying steel, it does not rust, but when the tin layer is broken the steel rusts. Explain.

.....

.....

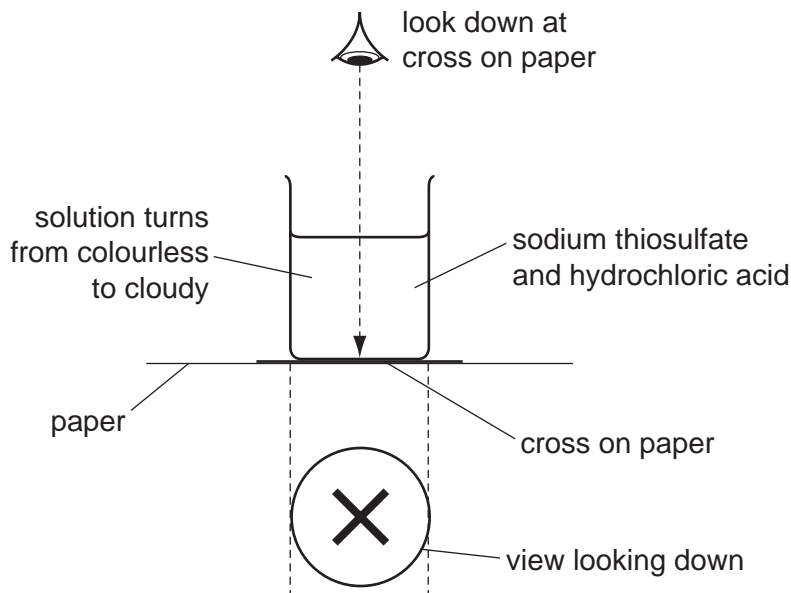
..... [4]

[Total: 14]

- 3 The equation for the reaction between sodium thiosulfate and hydrochloric acid is given below.



The speed of this reaction was investigated using the following experiment. A beaker containing 50 cm³ of 0.2 mol/dm³ sodium thiosulfate was placed on a black cross. 5.0 cm³ of 2.0 mol/dm³ hydrochloric acid was added and the clock was started.



Initially the cross was clearly visible. When the solution became cloudy and the cross could no longer be seen, the clock was stopped and the time recorded.

- (a) The experiment was repeated with 25 cm³ of 0.2 mol/dm³ sodium thiosulfate and 25 cm³ of water. Typical results for this experiment and a further two experiments are given in the table.

experiment	1	2	3	4
volume of thiosulfate/cm ³	50	40	25	10
volume of water/cm ³	0	10	25	40
volume of acid/cm ³	5	5	5	5
total volume/cm ³	55	55	55	55
time/s	48	60	96

- (i) Explain why it is necessary to keep the total volume the same in all the experiments.

.....

 [2]

- (ii) Complete the table. [1]

(iii) How and why does the speed of the reaction vary from experiment 1 to 4?

.....
.....
..... [3]

(b) The idea of collisions between reacting particles is used to explain changes in the speed of reactions. Use this idea to explain the following results.

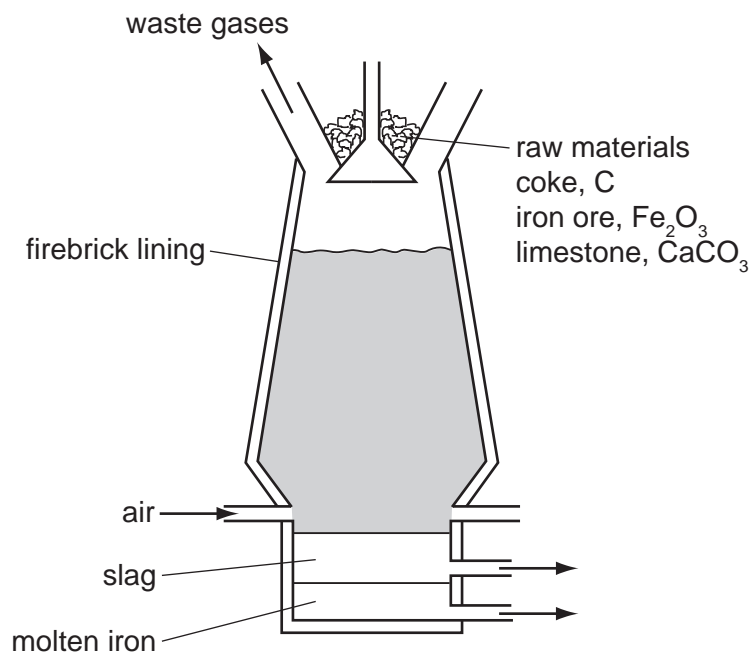
volume of sodium thiosulfate / cm ³	25	25
volume of water / cm ³	25	25
volume of acid / cm ³	5	5
temperature / °C	20	42
time / s	96	40

.....
.....
.....
..... [4]

[Total: 10]

- 4 Iron is extracted from its ore, hematite, in the blast furnace.

For
Examiner's
Use



Describe the reactions involved in this extraction. Include in your description an equation for a redox reaction and one for an acid/base reaction.

.....

.....

.....

.....

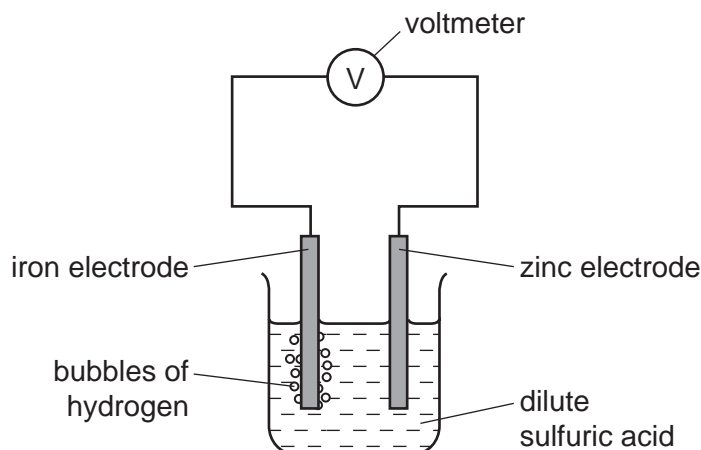
.....

..... [5]

[Total: 5]

5 The diagram shows a simple cell.

For
Examiner's
Use



(a) Write an equation for the overall reaction occurring in the cell.

..... [2]

(b) Explain why all cell reactions are exothermic and redox.

.....

 [3]

(c) Which electrode, zinc or iron, is the negative electrode? Give a reason for your choice.

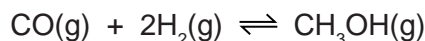
.....
 [2]

(d) Suggest **two** ways of increasing the voltage of this cell.

.....
 [2]

[Total: 9]

- 6 (a) Methanol can be made from a mixture of carbon monoxide and hydrogen.



The forward reaction is exothermic.

- (i) Explain why the concentration of methanol at equilibrium does not change.

.....
..... [2]

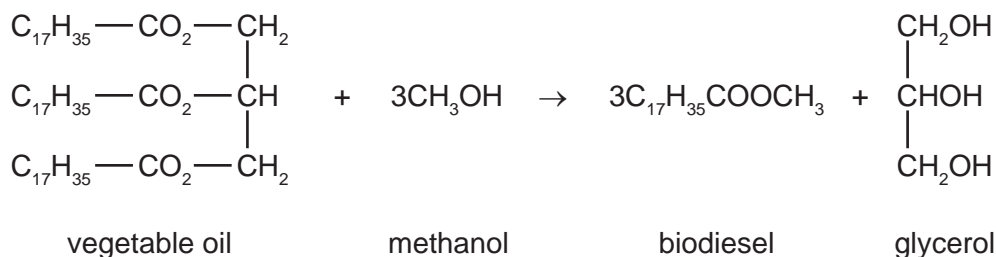
- (ii) Suggest conditions, in terms of temperature and pressure, which would give a high yield of methanol.

.....
..... [2]

- (iii) How would the conditions used in practice compare with those given in (ii)? Give an explanation of any differences.

.....
.....
..... [2]

- (b) Biodiesel is made from a vegetable oil by the following reaction.



- (i) What type of compound are vegetable oil and biodiesel?

..... [1]

- (ii) What other useful product is made from vegetable oil by heating it with aqueous sodium hydroxide?

..... [1]

- (iii) Suggest an explanation why making and using biodiesel has a smaller effect on the percentage of carbon dioxide in the atmosphere than using petroleum-based diesel.

.....
.....
..... [2]

(c) Petroleum-based diesel is a mixture of hydrocarbons, such as octane and octene.

(i) 'Oct' means eight carbon atoms per molecule. Draw a structural formula of an octene molecule.

[1]

(ii) Describe a test which would distinguish between octane and octene.

test

result with octane

result with octene [3]

[Total: 14]

7 Chlorine reacts with phosphorus to form phosphorus trichloride.

(a) Draw a diagram showing the arrangement of the **valency** electrons in one molecule of the covalent compound, phosphorus trichloride.

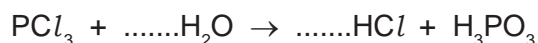
Use x to represent an electron from a phosphorus atom.

Use o to represent an electron from a chlorine atom.

[2]

(b) Phosphorus trichloride reacts with water to form two acids.

(i) Balance the equation for this reaction.



[1]

(ii) Describe how you could show that phosphorus acid, H_3PO_3 , is a weaker acid than hydrochloric acid.

.....

.....

..... [3]

- (iii) Two salts of phosphorus acid are its sodium salt, which is soluble in water, and its calcium salt which is insoluble in water. Suggest a method of preparation for each of these salts from aqueous phosphorus acid. Specify any other reagent needed and briefly outline the method.

sodium salt

.....

.....

..... [2]

calcium salt

.....

.....

..... [2]

[Total: 10]

8 Hydrocarbons are compounds which contain only carbon and hydrogen.

- (a) 20 cm³ of a gaseous hydrocarbon was burned in 120 cm³ of oxygen, which is in excess. After cooling, the volume of the gases remaining was 90 cm³. Aqueous sodium hydroxide was added to remove carbon dioxide, 30 cm³ of oxygen remained. All volumes were measured at r.t.p..

- (i) Explain why it is essential to use excess oxygen.

.....

..... [2]

- (ii) Carbon dioxide is slightly soluble in water. Why does it dissolve readily in the alkali, sodium hydroxide?

..... [1]


- (iii) Complete the following.

volume of gaseous hydrocarbon =cm³

volume of oxygen used =cm³

volume of carbon dioxide formed =cm³ [2]

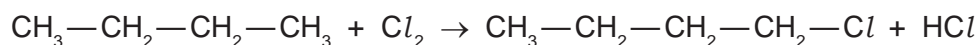
- (iv) Use the above volume ratio to find the mole ratio in the equation below and hence find the formula of the hydrocarbon.



hydrocarbon formula = [2]

(b) Alkanes are hydrocarbons and are generally unreactive. Their reactions include combustion, substitution and cracking.

(i) Chlorine reacts with butane in a substitution reaction.



Give the structural formula of another possible product of this reaction.

[1]

(ii) What is the essential condition for this reaction?

..... [1]

(iii) Explain what is meant by *cracking*. Give an example of a cracking reaction and explain why the process is used.

.....
.....
.....
.....
.....
..... [4]

[Total: 13]

DATA SHEET
The Periodic Table of the Elements

		Group																							
I	II	III	IV	V	VI	VII	0																		
7 Li Lithium 3	9 Be Beryllium 4	1 H Hydrogen 1	11 B Boron 5	12 C Carbon 6	14 N Nitrogen 7	16 O Oxygen 8	19 F Fluorine 9	20 Ne Neon 10	27 Al Aluminium 13	28 Si Silicon 14	31 P Phosphorus 15	32 S Sulfur 16	35.5 Cl Chlorine 17	40 Ar Argon 18	4 He Helium 2										
39 K Potassium 19	40 Ca Calcium 20	45 Sc Scandium 21	48 Ti Titanium 22	51 V Vanadium 23	52 Cr Chromium 24	55 Mn Manganese 25	56 Fe Iron 26	59 Co Cobalt 27	59 Ni Nickel 28	64 Cu Copper 29	65 Zn Zinc 30	70 Ga Gallium 31	73 Ge Germanium 32	75 As Arsenic 33	79 Se Selenium 34	80 Br Bromine 35	84 Kr Krypton 36								
85 Rb Rubidium 37	88 Sr Strontium 38	89 Y Yttrium 39	91 Zr Zirconium 40	93 Nb Niobium 41	96 Mo Molybdenum 42	101 Ru Ruthenium 44	101 Rh Rhodium 45	103 Rh Rhodium 45	106 Pd Palladium 46	108 Ag Silver 47	112 Cd Cadmium 48	115 In Indium 49	119 Sn Tin 50	122 Sb Antimony 51	128 Te Tellurium 52	127 I Iodine 53	131 Xe Xenon 54								
133 Cs Caesium 55	137 Ba Barium 56	139 La Lanthanum 57	178 Hf Hafnium 72	181 Ta Tantalum 73	184 W Tungsten 74	186 Re Rhenium 75	190 Os Osmium 76	192 Ir Iridium 77	195 Pt Platinum 78	197 Au Gold 79	201 Hg Mercury 80	204 Tl Thallium 81	207 Pb Lead 82	209 Bi Bismuth 83	212 Po Polonium 84	210 At Astatine 85	222 Rn Radon 86								
87 Fr Francium	88 Ra Radium	89 Ac Actinium																							
*58-71 Lanthanoid series																									
†90-103 Actinoid series																									
<table border="1" style="width: 100%; border-collapse: collapse; text-align: center;"> <tr> <td style="width: 5%;"></td> <td style="width: 5%;">a</td> <td style="width: 5%;">X</td> <td style="width: 5%;">b</td> </tr> <tr> <td>Key</td> <td>a = relative atomic mass</td> <td>X = atomic symbol</td> <td>b = proton (atomic) number</td> </tr> </table>																		a	X	b	Key	a = relative atomic mass	X = atomic symbol	b = proton (atomic) number	
	a	X	b																						
Key	a = relative atomic mass	X = atomic symbol	b = proton (atomic) number																						
140 Ce Cerium 58	141 Pr Praseodymium 59	144 Nd Neodymium 60	150 Sm Samarium 62	152 Eu Europium 63	157 Gd Gadolinium 64	162 Dy Dysprosium 66	165 Ho Holmium 67	167 Er Erbium 68	169 Tm Thulium 69	173 Yb Ytterbium 70	175 Lu Lutetium 71	232 Th Thorium 90	238 U Uranium 92	238 Pa Protactinium 91	238 Np Neptunium 93	238 Pu Plutonium 94	238 Am Americium 95	238 Cm Curium 96	238 Bk Berkelium 97	238 Cf Californium 98	238 Es Einsteinium 99	238 Fm Fermium 100	238 Md Mendelevium 101	238 No Nobelium 102	238 Lr Lawrencium 103

The volume of one mole of any gas is 24 dm³ at room temperature and pressure (r.t.p.).

Permission to reproduce items where third-party owned material protected by copyright is included has been sought and cleared where possible. Every reasonable effort has been made by the publisher (UCLES) to trace copyright holders, but if any items requiring clearance have unwittingly been included the publisher will be pleased to make amends at the earliest possible opportunity.

University of Cambridge International Examinations is part of the Cambridge Assessment Group. Cambridge Assessment is the brand name of University of Cambridge Local Examinations Syndicate (UCLES), which is itself a department of the University of Cambridge.