



UNIVERSITY OF CAMBRIDGE INTERNATIONAL EXAMINATIONS
International General Certificate of Secondary Education

CANDIDATE
NAME

CENTRE
NUMBER

--	--	--	--	--

CANDIDATE
NUMBER

--	--	--	--

* 6 7 0 3 3 6 3 3 6 6 *

CHEMISTRY

0620/03

Paper 3 (Extended)

May/June 2007

1 hour 15 minutes

Candidates answer on the Question Paper.

No Additional Materials required.

READ THESE INSTRUCTIONS FIRST

Write your Centre number, candidate number and name on all the work you hand in.

Write in dark blue or black pen in the spaces provided on the Question Paper.

You may use a pencil for any diagrams, graphs or rough working.

Do not use staples, paper clips, highlighters, glue or correction fluid.

DO **NOT** WRITE IN ANY BARCODES.

Answer **all** questions.

A copy of the Periodic Table is printed on page 16.

At the end of the examination, fasten all your work securely together.

The number of marks is given in brackets [] at the end of each question or part question.

For Examiner's Use	
1	
2	
3	
4	
5	
6	
7	
Total	

This document consists of **14** printed pages and **2** blank pages.



1 A major source of energy is the combustion of fossil fuels.

(a) (i) Name a solid fossil fuel.

..... [1]

(ii) Name a gaseous fossil fuel.

..... [1]

(b) Petroleum is separated into more useful fractions by fractional distillation.

(i) Name **two** liquid fuels obtained from petroleum.

..... and [2]

(ii) Name **two** other useful products obtained from petroleum that are not used as fuels.

..... and [2]

(iii) Give another mixture of liquids that is separated on an industrial scale by fractional distillation.

..... [1]

[Total: 7]

2 Complete the following table.

type of structure	particles present	electrical conductivity of solid	electrical conductivity of liquid	example
ionic	positive and negative ions	poor
macro molecular	atoms of two different elements in a giant covalent structure	poor	poor
metallic and	good	copper

[Total: 6]

For
Examiner's
Use

3 There are three methods of preparing salts.

Method **A** – use a burette and an indicator.

Method **B** – mix two solutions and obtain the salt by precipitation.

Method **C** – add an excess of base or a metal to a dilute acid and remove the excess by filtration.

For each of the following salt preparations, choose one of the methods **A**, **B** or **C**, name any additional reagent needed and then write or complete the equation.

(i) the soluble salt, zinc sulphate, from the insoluble base, zinc oxide

method

reagent

word equation [3]

(ii) the soluble salt, potassium chloride, from the soluble base, potassium hydroxide

method

reagent

equation + → $KCl + H_2O$ [3]

(iii) the insoluble salt, lead(II) iodide, from the soluble salt, lead(II) nitrate

method

reagent

equation $Pb^{2+} +$ → [4]

[Total: 10]

4 Use your copy of the periodic table to help you answer these questions.

For
Examiner's
Use

(a) Predict the formula of each of the following compounds.

(i) barium oxide [1]

(ii) boron oxide [1]

(b) Give the formula of the following ions.

(i) sulphide [1]

(ii) gallium [1]

(c) Draw a diagram showing the arrangement of the valency electrons in one molecule of the covalent compound nitrogen trichloride.

Use x to represent an electron from a nitrogen atom.
Use o to represent an electron from a chlorine atom. [3]

(d) Potassium and vanadium are elements in Period IV.

(i) State **two** differences in their physical properties.

.....
..... [2]

(ii) Give **two** differences in their chemical properties.

.....
..... [2]

(e) Fluorine and astatine are halogens. Use your knowledge of the other halogens to predict the following:

*For
Examiner's
Use*

(i) The physical state of fluorine at r.t.p.

The physical state of astatine at r.t.p. [2]

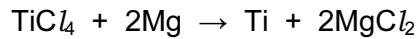
(ii) **Two** similarities in their chemical properties

.....

..... [2]

[Total 15]

- 5 (a) Titanium is produced by the reduction of its chloride. This is heated with magnesium in an inert atmosphere of argon.



- (i) Explain why it is necessary to use argon rather than air.

..... [1]

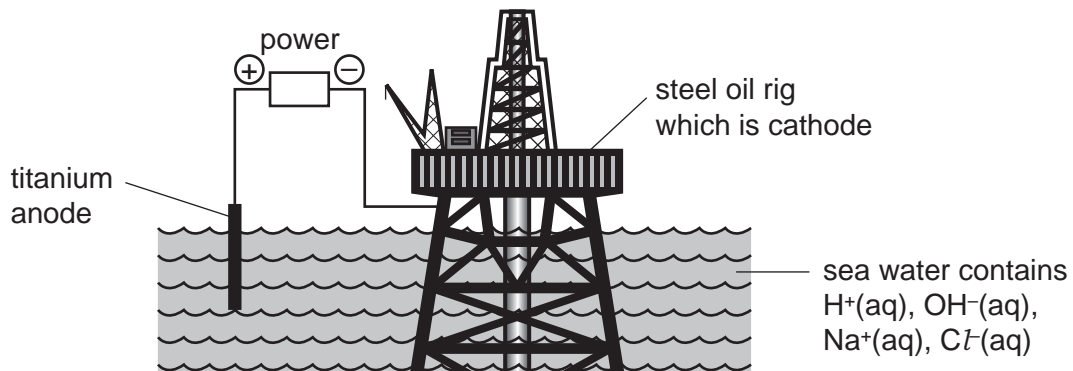
- (ii) Name another metal that would reduce titanium chloride to titanium.

..... [1]

- (iii) Suggest how you could separate the metal, titanium, from the soluble salt magnesium chloride.

.....
..... [2]

- (b) Titanium is very resistant to corrosion. One of its uses is as an electrode in the cathodic protection of large steel structures from rusting.



- (i) Define oxidation in terms of electron transfer.

..... [1]

- (ii) The steel oil rig is the cathode. Name the gas formed at this electrode.

..... [1]

- (iii) Name the **two** gases formed at the titanium anode.

..... and [2]

- (iv) Explain why the oil rig does not rust.

.....
..... [2]

(v) Another way of protecting steel from corrosion is sacrificial protection.
Give **two** differences between sacrificial protection and cathodic protection.

.....
..... [2]

[Total: 12]

*For
Examiner's
Use*

6 Aluminium is extracted by the electrolysis of a molten mixture that contains alumina, which is aluminium oxide, Al_2O_3 .

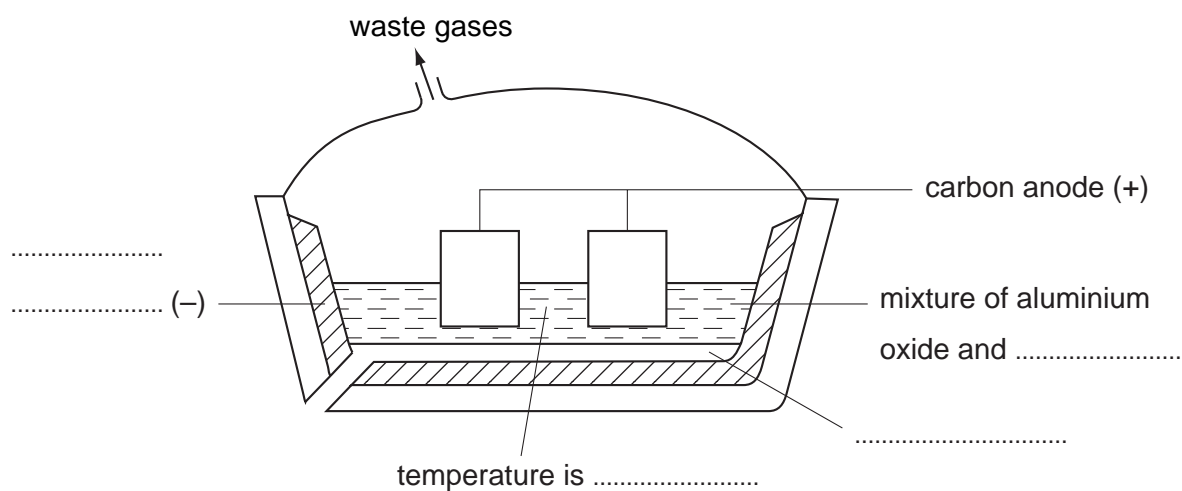
For
Examiner's
Use

(a) The ore of aluminium is bauxite. This contains alumina, which is amphoteric, and iron(III) oxide, which is basic. The ore is heated with aqueous sodium hydroxide. Complete the following sentences.

The dissolves to give a solution of

The does not dissolve and can be removed by [4]

(b) Complete the labelling of the diagram.



[4]

(c) The ions that are involved in the electrolysis are Al^{3+} and O^{2-} .

(i) Write an equation for the reaction at the cathode.

..... [2]

(ii) Explain how carbon dioxide is formed at the anode.

..... [2]

.....

(d) Give an explanation for each of the following.

(i) Aluminium is used extensively in the manufacture of aircraft.

..... [1]

(ii) Aluminium is used to make food containers.

..... [2]

(iii) Aluminium electricity cables have a steel core.

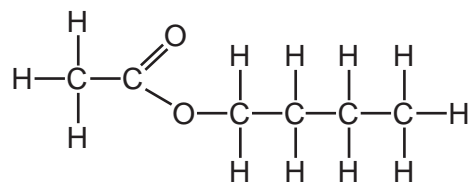
..... [1]

[Total: 16]

*For
Examiner's
Use*

7 Esters, fats and polyesters all contain the ester linkage.

(a) The structural formula of an ester is given below.



Name **two** chemicals that could be used to make this ester and draw their structural formulae. Show all bonds.

names and [2]

structural formulae

[2]

(b) (i) Draw the structural formula of a polyester such as *Terylene*.

[2]

(ii) Suggest a use for this polymer.

..... [1]

For
Examiner's
Use

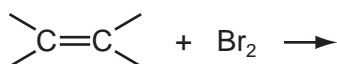
- (c) Cooking products, fats and vegetable oils, are mixtures of saturated and unsaturated esters.

For
Examiner's
Use

The degree of unsaturation can be estimated by the following experiment. 4 drops of the oil are dissolved in 5 cm³ of ethanol. Dilute bromine water is added a drop at a time until the brown colour no longer disappears. Enough bromine has been added to the sample to react with all the double bonds.

cooking product	mass of saturated fat in 100 g of product/g	mass of unsaturated fat in 100 g of product/g	number of drops of bromine water
margarine	35	35	5
butter	45	28	4
corn oil	10	84	12
soya oil	15	70	10
lard	38	56

- (i) Complete the one blank space in the table. [1]
- (ii) Complete the equation for bromine reacting with a double bond.



[2]

- (iii) Using saturated fats in the diet is thought to be a major cause of heart disease. Which of the products is the least likely to cause heart disease?

..... [1]

- (d) A better way of measuring the degree of unsaturation is to find the iodine number of the unsaturated compound. This is the mass of iodine that reacts with all the double bonds in 100 g of the fat.

For
Examiner's
Use

Use the following information to calculate the number of double bonds in one molecule of the fat.

Mass of one mole of the fat is 884 g.

One mole of I_2 reacts with one mole $\begin{array}{c} \diagup \\ \text{C}=\text{C} \\ \diagdown \end{array}$.

The iodine number of the fat is 86.2 g.

Complete the following calculation.

100 g of fat reacts with 86.2 g of iodine.

884 g of fat reacts with g of iodine.

One mole of fat reacts with moles of iodine molecules.

Number of double bonds in one molecule of fat is [3]

[Total: 14]

BLANK PAGE

Permission to reproduce items where third-party owned material protected by copyright is included has been sought and cleared where possible. Every reasonable effort has been made by the publisher (UCLES) to trace copyright holders, but if any items requiring clearance have unwittingly been included, the publisher will be pleased to make amends at the earliest possible opportunity.

University of Cambridge International Examinations is part of the Cambridge Assessment Group. Cambridge Assessment is the brand name of University of Cambridge Local Examinations Syndicate (UCLES), which is itself a department of the University of Cambridge.

DATA SHEET
The Periodic Table of the Elements

		Group												
I	II	III	IV	V	VI	VII	0						0	
		1 H Hydrogen 1											4 He Helium 2	
7 Li Lithium 3	9 Be Beryllium 4											20 Ne Neon 10		
23 Na Sodium 11	24 Mg Magnesium 12	5 B Boron 5	11 Al Aluminium 13	12 C Carbon 6	14 N Nitrogen 7	16 O Oxygen 8	19 F Fluorine 9	35.5 Cl Chlorine 17	31 P Phosphorus 15	32 S Sulphur 16	75 As Arsenic 33	80 Br Bromine 35	131 Xe Xenon 54	
39 K Potassium 19	40 Ca Calcium 20	27 Co Cobalt 27	26 Fe Iron 26	24 Cr Chromium 24	25 Mn Manganese 25	28 Ni Nickel 28	29 Cu Copper 29	30 Zn Zinc 30	31 Ga Gallium 31	32 Ge Germanium 32	50 In Indium 49	51 Sb Antimony 51	52 Te Tellurium 52	84 Kr Krypton 36
85 Rb Rubidium 37	88 Sr Strontium 38	48 Ti Titanium 22	45 Sc Scandium 21	91 Zr Zirconium 40	93 Nb Niobium 41	96 Mo Molybdenum 42	101 Ru Ruthenium 44	103 Rh Rhodium 45	106 Pd Palladium 46	108 Ag Silver 47	112 Cd Cadmium 48	115 In Indium 49	122 Sb Antimony 51	137 Cs Caesium 55
133 Cs Caesium 55	137 Ba Barium 56	140 Ce Cerium 58	141 Pr Praseodymium 59	144 Nd Neodymium 60	146 Pm Promethium 61	150 Sm Samarium 62	152 Eu Europium 63	157 Gd Gadolinium 64	162 Dy Dysprosium 66	163 Ho Holmium 67	165 Er Erbium 68	167 Tm Thulium 69	173 Yb Ytterbium 70	226 Ra Radium 88
226 Fr Francium 87	227 Ac Actinium 89	141 Pr Praseodymium 59	144 Nd Neodymium 60	146 Pm Promethium 61	150 Sm Samarium 62	152 Eu Europium 63	157 Gd Gadolinium 64	162 Dy Dysprosium 66	163 Ho Holmium 67	165 Er Erbium 68	167 Tm Thulium 69	173 Yb Ytterbium 70	227 Ac Actinium 89	
		232 Th Thorium 90	238 U Uranium 92	91 Pa Protactinium 91	93 Np Neptunium 93	94 Pu Plutonium 94	95 Am Americium 95	96 Cm Curium 96	97 Bk Berkelium 97	98 Cf Californium 98	99 Es Einsteinium 99	100 Fm Fermium 100	101 Md Mendelevium 101	86 Rn Radon 86
		140 Ce Cerium 58	141 Pr Praseodymium 59	144 Nd Neodymium 60	146 Pm Promethium 61	150 Sm Samarium 62	152 Eu Europium 63	157 Gd Gadolinium 64	162 Dy Dysprosium 66	163 Ho Holmium 67	165 Er Erbium 68	167 Tm Thulium 69	173 Yb Ytterbium 70	175 Lu Lutetium 71
		90 Th Thorium 90	91 Pa Protactinium 91	92 U Uranium 92	93 Np Neptunium 93	94 Pu Plutonium 94	95 Am Americium 95	96 Cm Curium 96	97 Bk Berkelium 97	98 Cf Californium 98	99 Es Einsteinium 99	100 Fm Fermium 100	101 Md Mendelevium 101	103 Lr Lawrencium 103

*58-71 Lanthanoid series
†90-103 Actinoid series

Key

a	X	a = relative atomic mass
b	X	X = atomic symbol
	X	b = proton (atomic) number

The volume of one mole of any gas is 24 dm³ at room temperature and pressure (r.t.p.).